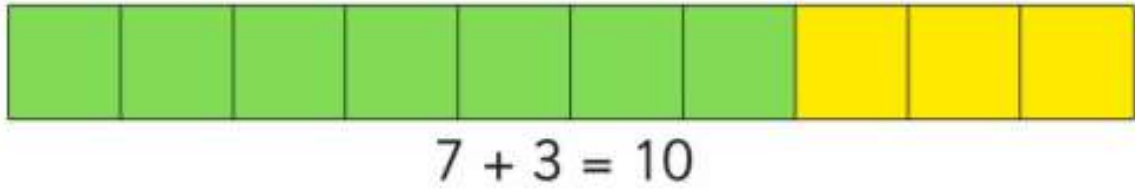


Today's activity is for an M9 in number. Can you write the number sentences that go with the number bonds to 10.

Can you complete these number sentences using number bonds to 10?



Can you write a matching number sentence below each stick?




$$\square + \square = 10$$




$$\square + \square = 10$$




$$\square + \square = 10$$




$$\square + \square = 10$$



$$\square + \square = 10$$




$$\square + \square = 10$$




$$\square + \square = 10$$



$$\square + \square = 10$$




$$\square + \square = 10$$



$$\square + \square = 10$$

Number Bond Sticks - Extension

This number bond stick is made from 7 green cubes and 3 yellow cubes.



$$7 + 3 = 10$$

Can you use two colours to make your own sticks with number bonds of 10?
Can you write a matching number sentence below each picture?



$$\square + \square = 10$$



$$\square + \square = 10$$



$$\square + \square = 10$$



$$\square + \square = 10$$