

Multiplication and Division

Challenge Cards



Multiplication and Division

1. I have 3 coins in my purse. All of the coins are 5c. How much money do I have altogether?



Multiplication and Division

2. I have 50c. All my coins are 10c pieces. How many coins do I have?



Multiplication and Division

3. In a relay race, 4 children swim 2 lengths each. How many lengths did the children swim altogether?



Multiplication and Division


4. I look after 5 dogs. I have 30 biscuits to share equally between them.
How many biscuits can I give to each dog?



twinkl.com

Multiplication and Division

5. 4 groups of children go on a school trip.
There are 10 children in each group.
How many children go on the trip?



twinkl.com

Multiplication and Division

6. Adults can take 5 children each to the cinema in their cars. If 40 children are going to the cinema, how many cars are needed to take them?



twinkl.com

Multiplication and Division


7. I buy 6 bottles of lemonade. If there are 2 litres in each bottle, how many litres of lemonade have I bought?



twinkl.com

Multiplication and Division


8. When I plant my onions, I plant 6 rows and put 10 onions in each row. How many onions do I plant?



twinkl.com

Multiplication and Division

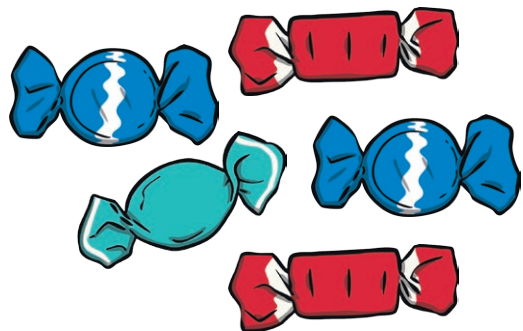
9. I plant 80 carrots, with 10 in each row. How many rows of carrots do I plant?



twinkl.com

Multiplication and Division

10. I buy 8 packets of sweets. There are 5 sweets in each packet. How many sweets do I have?



twinkl.com

Multiplication and Division

11. I bake 50 buns. If I put 5 in each bag for my cake stall, how many bags will I fill?



twinkl.com

Multiplication and Division

12. I have 20 spare football cards. I share them equally between my 5 friends. How many cards will they get each?



twinkl.com

Multiplication and Division

13. There are 20 sunflower seeds in a packet. If I divide them equally between 10 pots, how many seeds will be in each pot?



twinkl.com

Multiplication and Division

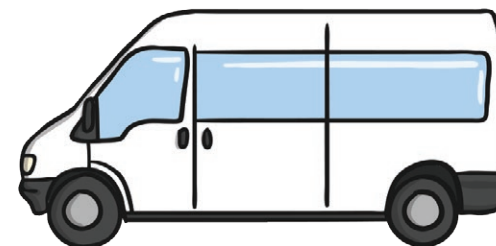
14. There are 20 sunflower seeds in a packet. If I put 2 seeds in each pot, how many pots will I fill?



twinkl.com

Multiplication and Division

15. The whole school goes on a trip. There are 80 people and 10 people can fit in a minibus. How many minibuses will the school need to book?



twinkl.com


Multiplication and Division

16. My bookcase has 10 shelves and 10 books on each shelf. How many books are on my bookcase?



Multiplication and Division

17. How many toes are there altogether between 5 children?



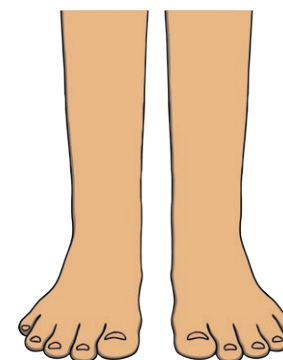
Multiplication and Division

18. I can see 20 eyes. How many people can I see?



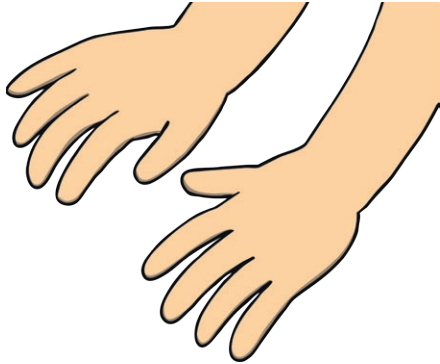
Multiplication and Division

19. How many feet are there altogether between 8 children?



Multiplication and Division

20. I can see 18 hands. How many people can I see?



Multiplication and Division Answers

- 15c
- 5
- 8 lengths
- 6 biscuits
- 40 children
- 8 cars
- 12 litres
- 60 onions
- 8 rows
- 40 sweets
- 10 bags
- 4 cards
- 2 seeds
- 10 pots
- 8 minibuses
- 100 books
- 50 toes
- 10 people
- 16 feet
- 9 people